

ADI SOYADI:

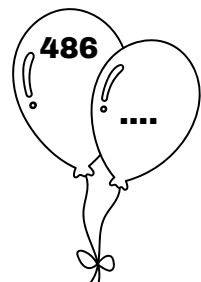
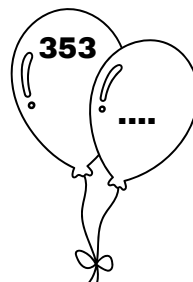
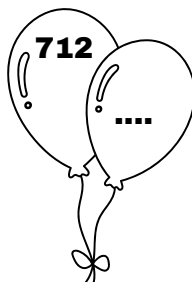
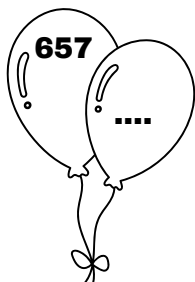
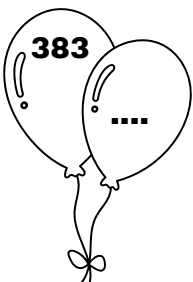


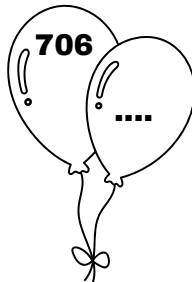
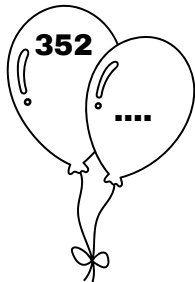
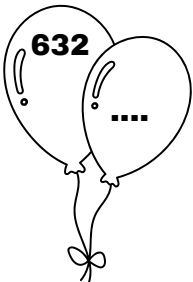
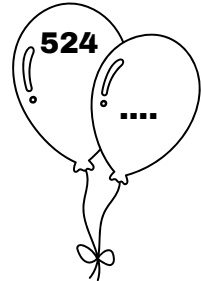
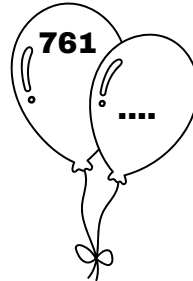
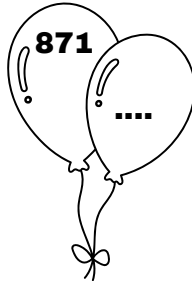
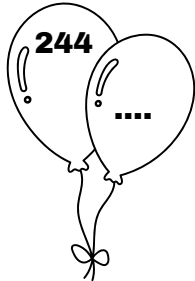
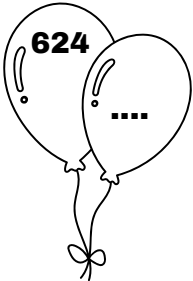
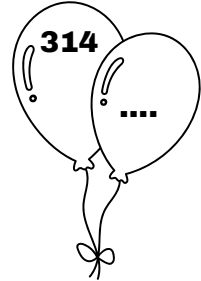
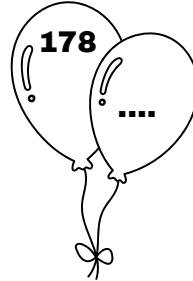
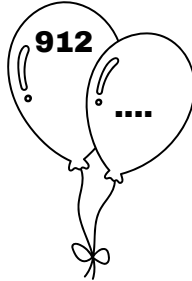
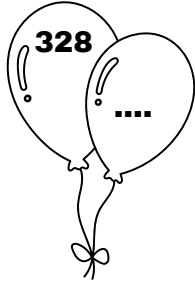
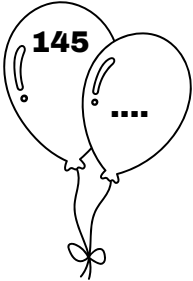
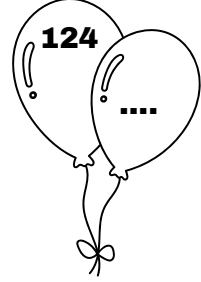

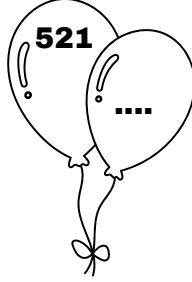
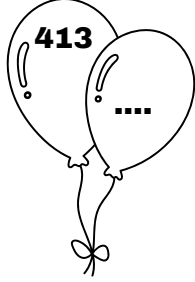
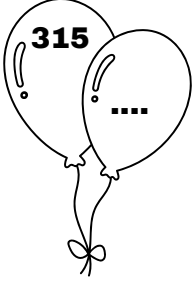
3.SINIF

MATEMATİK KONU ANLATIM ÇALIŞMASI

DOĞAL SAYILARI EN YAKIN ONLUĞA YUVARLAMA



Balonların üzerinde yazan sayıları en yakın onluğa yuvarlayalım.
Yuvarlanan onluğu yanındaki balona yazıp boyayalım.



ADI SOYADI:

3.SINIF

MATEMATİK KONU ANLATIM ÇALIŞMASI

DOĞAL SAYILARI EN YAKIN YÜZLÜĞE YUVARLAMA



Balonların üzerinde yazan sayıları en yakın yüzlüğe yuvarlayalım.
Yuvarlanan yüzlüğü yanındaki balona yazıp boyayalım.

