




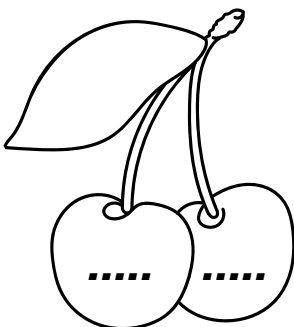



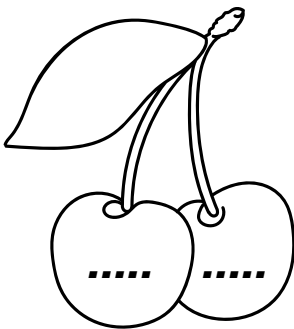



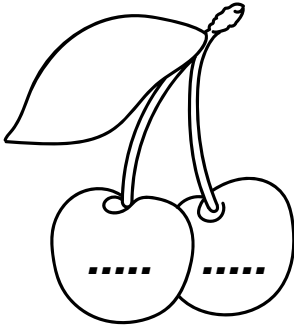

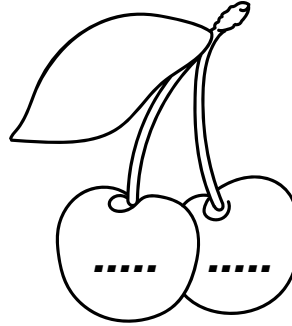

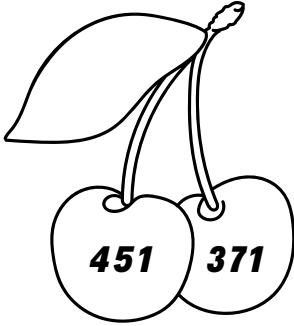
ADI SOYADI:

3.SINIF

MATEMATİK KONU ANLATIM ÇALIŞMA KAĞIDI

TEK VE ÇİFT DOĞAL SAYILAR

Aşağıdaki kirazlardan çift yapraklı olanlara üç basamaklı çift sayılar, tek yapraklı olan kirazlara iki basamaklı tek sayılar yazalım.



ADI SOYADI:**3.SINIF****MATEMATİK KONU ANLATIM ÇALIŞMA KAĞIDI****TEK VE ÇİFT DOĞAL SAYILAR**

Aşağıda verilen yüzlük tablodaki sayılardan çift olanların kutucuğunu maviye, tek olanların kutucuğunu kırmızı boyayalım.



1	2	3	4	5	6	7	8	9	10
11	12	13	14	15	16	17	18	19	20
21	22	23	24	25	26	27	28	29	30
31	32	33	34	35	36	37	38	39	40
41	42	43	44	45	46	47	48	49	50
51	52	53	54	55	56	57	58	59	60
61	62	63	64	65	66	67	68	69	70
71	72	73	74	75	76	77	78	79	80
81	82	83	84	85	86	87	88	89	90
91	92	93	94	95	96	97	98	99	100