

ADI SOYADI:

2.SINIF

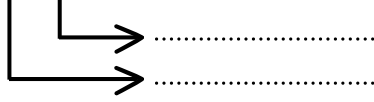
MATEMATİK KONU ANLATIM ÇALIŞMASI

BASAMAK ADI - BASAMAK DEĞERİ - ÇÖZÜMLEME

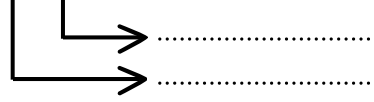


Aşağıda verilen doğal sayıların basamak adlarını yazalım.

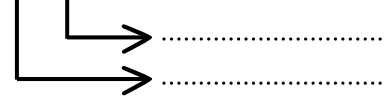
4 8



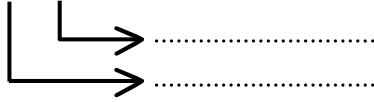
6 2



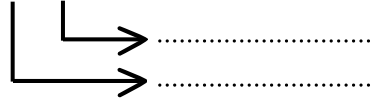
7 8



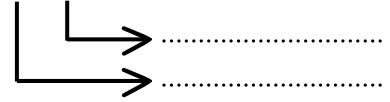
9 1



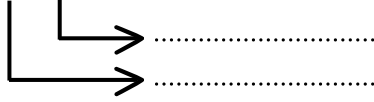
2 4



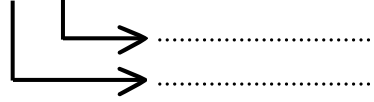
7 3



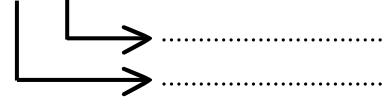
4 7



3 9



5 5



4 9



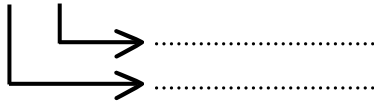
7 0



6 3



4 1




2 5




1 9



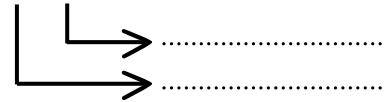
3 7



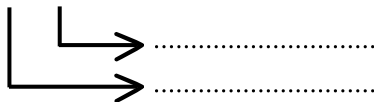
4 6



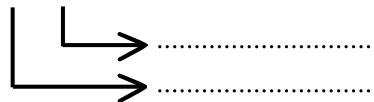
5 3



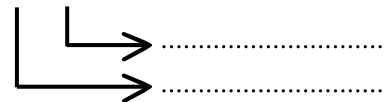
2 7



3 1



6 7



ADI SOYADI:

2.SINIF

MATEMATİK KONU ANLATIM ÇALIŞMASI

BASAMAK ADI - BASAMAK DEĞERİ - ÇÖZÜMLEME



Aşağıda çözümlenmiş olarak verilen sayıları örnekteki gibi sayılar ile yazalım

6 onluk + 5 birlik 65

5 onluk + 7 birlik

4 onluk + 3 birlik

7 onluk + 3 birlik

1 onluk + 9 birlik

4 onluk + 0 birlik

6 onluk + 2 birlik

3 onluk + 1 birlik

7 onluk + 8 birlik

9 onluk + 1 birlik

3 onluk + 8 birlik

3 onluk + 7 birlik

7 onluk + 7 onluk

8 onluk + 3 birlik

8 onluk + 1 birlik

7 onluk + 1 birlik

2 onluk + 7 birlik

8 onluk + 5 birlik

6 onluk + 7 birlik

4 onluk + 7 birlik

7 onluk + 4 birlik

5 onluk + 0 birlik

2 onluk + 0 birlik

6 onluk + 9 birlik

5 onluk + 1 birlik

4 onluk + 8 birlik

4 onluk + 1 birlik

6 onluk + 5 birlik

2 onluk + 7 birlik

7 onluk + 6 onluk

6 onluk + 3 birlik

6 onluk + 1 birlik

8 onluk + 0 birlik

9 onluk + 7 birlik