

# BİLSEM ADAY BELİRLEME DENEME SINAVI

## BİLSEM EĞİTİM SETİ

Çocuklarda zeka, dikkat ve hafıza gelişimi için özel olarak tasarlanmış olan bu eğitim seti ile çocuğunuzun öğrenme kapasitesini, algı becerilerini, farkındalığını ve problem çözme yeteneğini artırabilirsiniz.



**eğitimgen**  
yarıma bir hikaye bırak


[www.egitimgen.com](http://www.egitimgen.com)




**BİLSEMREHBERİ**

[www.bilsemrehberi.com](http://www.bilsemrehberi.com)

 **0552 083 18 02**


 **@bilsemrehberi**

1

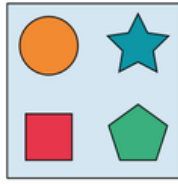


@bilsemrehberi


A




B




C



D



2



@bilsemrehberi

A




B



C



D



3



@bilsemrehberi

A



B




C



D




4



@bilsemrehberi


A



B



C




D







Bilsem Rehberi Aday Belirleme Sınavı



9







@bilsemrehberi

- A  B 
- C  D 

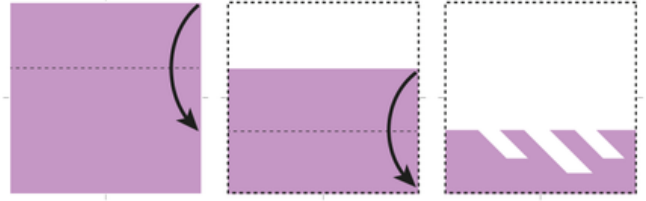
10







@bilsemrehberi

- A  B 
- C  D 

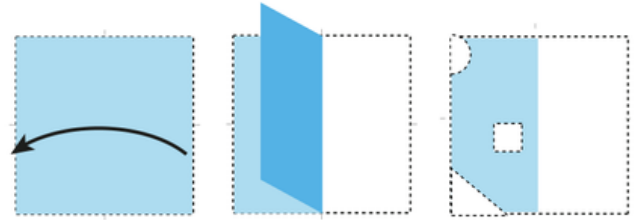
11







@bilsemrehberi

- A  B 
- C  D 

12



@bilsemrehberi

- A  B 
- C  D 

Bilsem Rehberi Aday Belirleme Sınavı

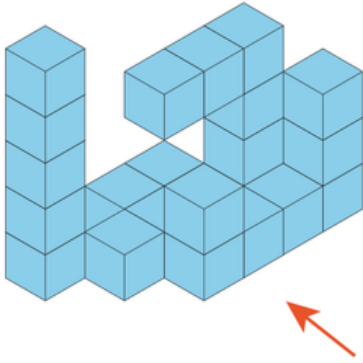
13



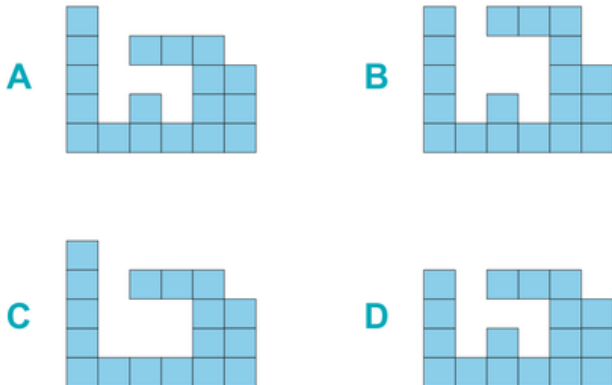
@bilsemrehberi



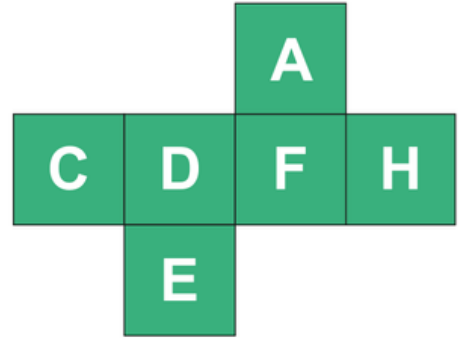
14



@bilsemrehberi

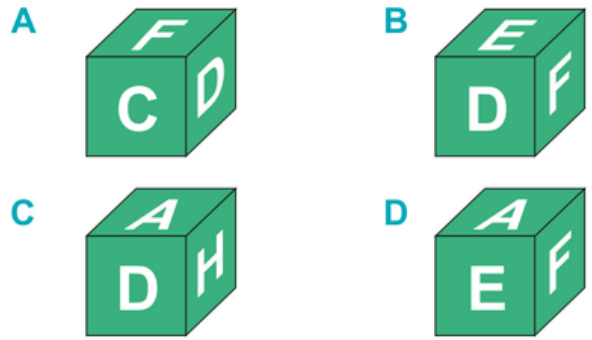


15



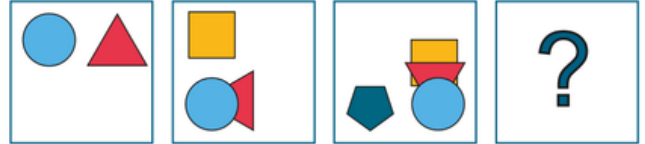
Yukardaki küp açılımı aşağıdaki küplerden hangisinin açılımı olabilir?

@bilsemrehberi

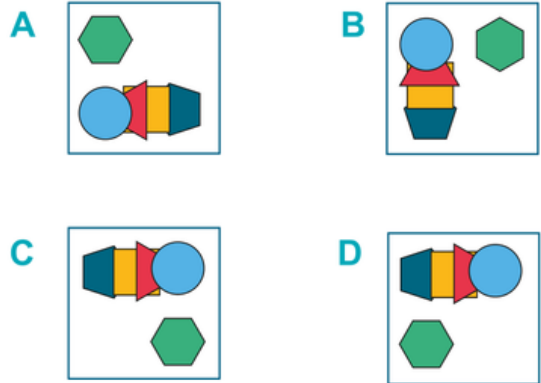


Bilsem Rehberi Aday Belirleme Sınavı


16



@bilsemrehberi



17



Yukarda kaç tane küp vardır?

@bilsemrehberi

A

B

C

D


25

20

19

22

18



@bilsemrehberi

A



B



C



D



19

Heceler

İN

Sİ

EK

Nİ

Sayısal Karşılıkları

53, 41, 35, 75

İSTENEN

SİNEK

@bilsemrehberi

A

41753

B

53741

C


41375

D

75341

Bilsem Rehberi Aday Belirleme Sınavı

20



Yukarda verilenlere göre aşağıdaki işlemin sonucu nedir?

@bilsemrehberi

$$\text{●} \triangle \square \text{●} = ?$$

A

B

C

D

