

ADI SOYADI:

2.SINIF


MATEMATİK KONU ANLATIM ÇALIŞMASI

BÜTÜN, YARIM, ÇEYREK İLİŞKİSİ




Bilgi:


- Bir nesnenin tamamına bütün denir.
- Bütünün iki eş parçasından her birine yarım denir.
- Bütünün dört eş parçasından her birine çeyrek denir.



Bütün elma



2 yarım elma




4 çeyrek elma

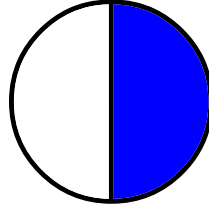
Not: Eş parçalara karşılık gelen sayılara kesir denir. Kesirlerde, kesir çizgisinin üstündeki sayıya pay, altındaki sayıya ise payda denir.



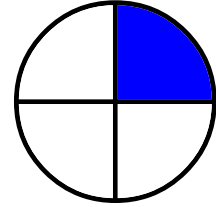
Aşağıda verilen kesir modellerinin altına "bütün, yarım ve çeyrek" ifadelerinden uygun olanı yazalım.



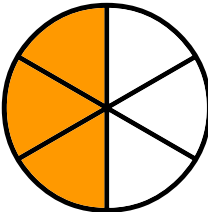
.....



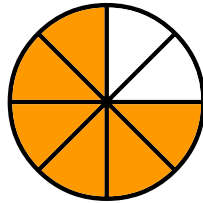
.....



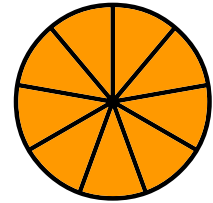
.....



.....



.....



.....

ADI SOYADI:


2.SINIF

MATEMATİK KONU ANLATIM ÇALIŞMASI


BÜTÜN, YARIM, ÇEYREK İLİŞKİSİ




Aşağıdaki kesirlerden altında yazan kadarını boyyalım.



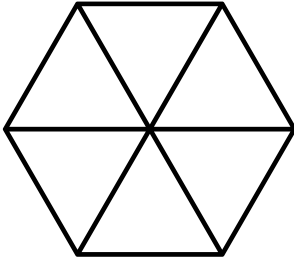
Bütün



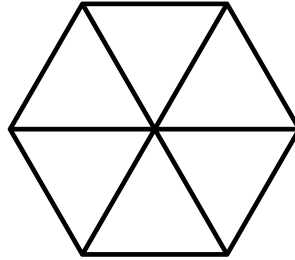
Yarım



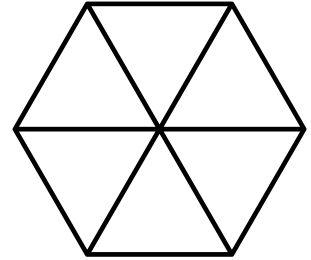
Çeyrek



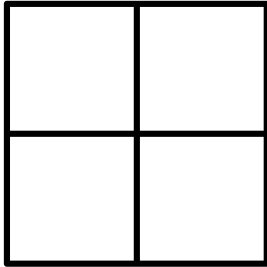
Bütün



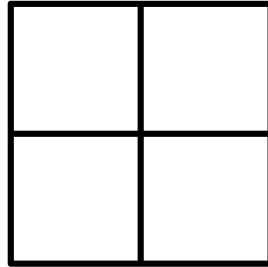
Yarım



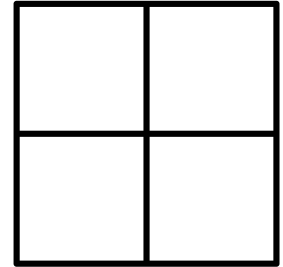
Çeyrek



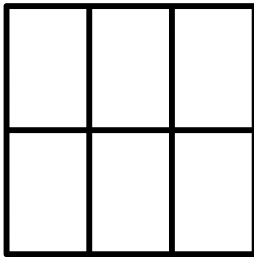
Bütün



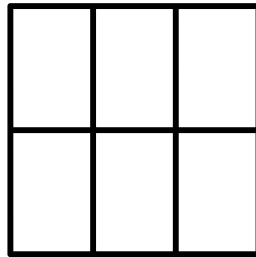
Yarım



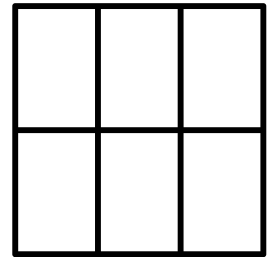
Çeyrek



Bütün



Yarım



Çeyrek