






- 1 Bütün 2 yarım eder.
- 2 Yarım 1 bütün eder












Aşağıda görselleri verilen nesnelerin yanına "bütün", "yarım" ifadelerinden uygun olanını yazalım.











Aşağıda verilen bütün elmalardan kaç yarım elma oluşur? Altlarına yazalım.



Aşağıda verilen yarım pizzalardan kaç bütün pizza oluşur? Altlarına yazalım.



ADI SOYADI:

ETKİNLİK ADI: KESİRLER-BÜTÜN-YARIM



Aşağıda şekillerin yarısını boyyalım.

